



WEEKLY SKILLS

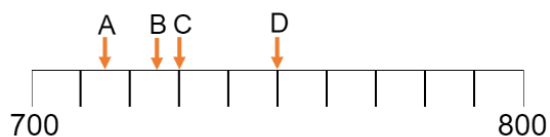
Date: _____

1. Fill in the missing number?

20 24 28 36

2. Put these numbers in ascending order: 419 149 94 491

3. Which letter shows 730?



4. Use the digits once to fill in the gaps and make this sentence true: 2 8

5 8 <

5. a) What is 10 less than 115?

b) What is 100 more than 782?

6. What time does the clock show?



7. Solve $237 + 188$

8. Solve $617 - 209$

9. What is $456 + 3$?

10. What is $521 + 70$?

11. What is $139 + 500$?

12. What is $848 - 7$?

13. What is $666 - 60$?

14. What is $724 - 200$?

15. Write a number that could fit in the box:

200

>

?


>

123

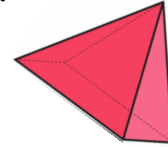


WEEKLY SKILLS

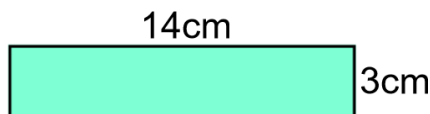
16. Is this angle bigger or smaller than a right angle?



17. Name this shape:




18. Calculate the perimeter:



19. Solve 38×4

20. Solve $60 \div 4$.

21. What fraction is shaded?



22. Solve:

$$\frac{3}{8} + \frac{2}{8} - \frac{4}{8} =$$

23. Fill in the blank:

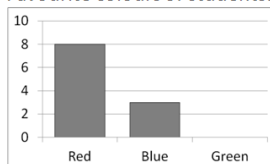
$$1 \square \frac{4}{10} \frac{1}{10}$$

24. Circle the biggest fraction:

$$\frac{1}{3} \quad \text{or} \quad \frac{1}{8}$$

25: Look at the bar chart:

Favourite colours of students:



- a) How many more children chose red than blue?
b) 7 children chose green, Add this onto the chart.

19. Complete the shape to make it a pentagon:

