



E.g. 7p

 -  = 5p

 -  =


 -  =

 -  =

 -  =

 - = 2p

 -  =



Name: _____

Subject: Year 2 Maths

Date: _____

Sheet: Money subtraction

Complete the following sums:

a    -   = _____

b    -   = _____

c    -   = _____

d    -   = _____

e    -   = _____

f    -   = _____

g    -   = _____